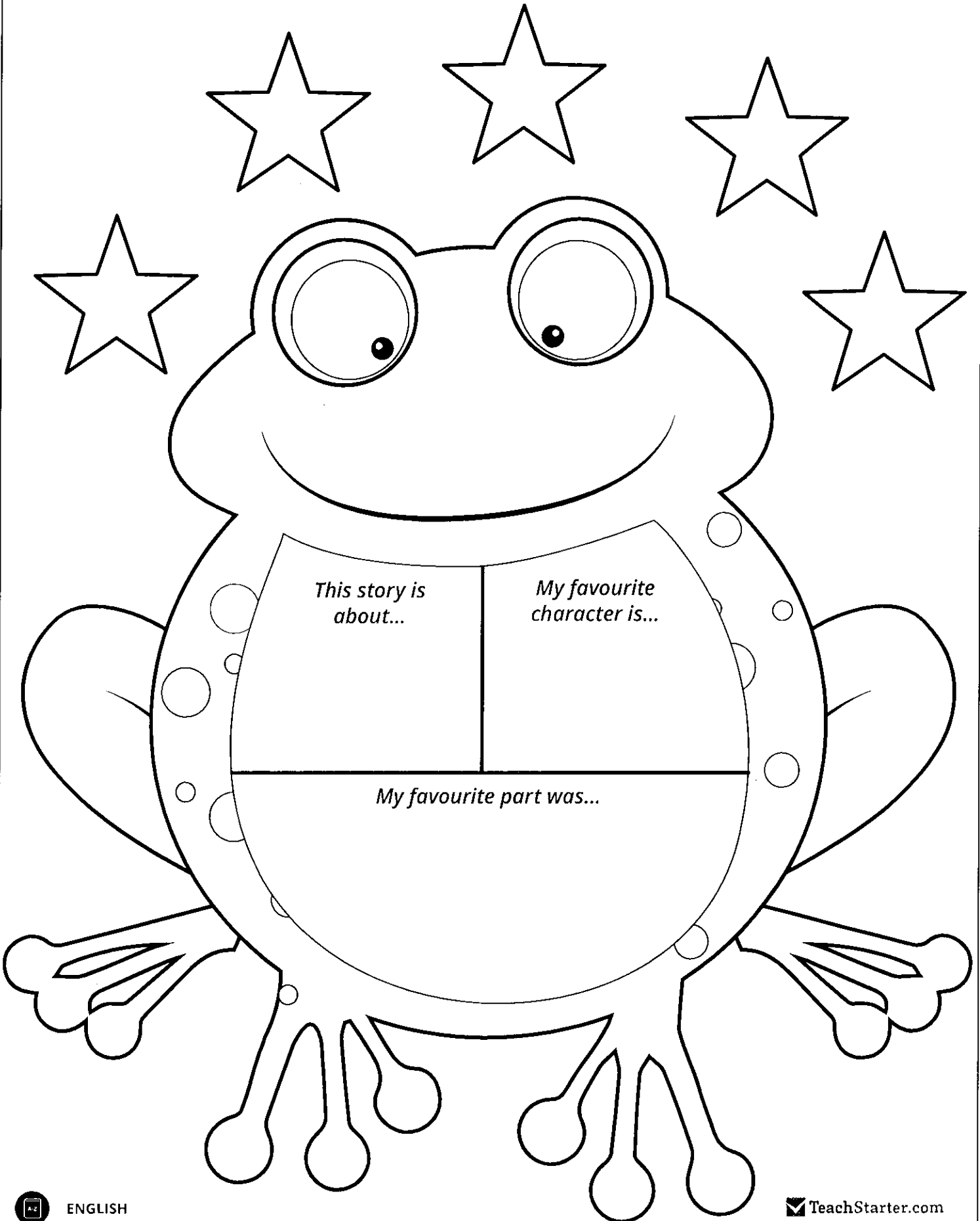



Day 11

My Book Report for




Name: _____

Date: _____



Compound Sentences



Combine two simple sentences to make a compound sentence.

I turned the
music down

simple sentence

, because

conjunction

it was too loud.

simple sentence

Direction: Expand the sentence by adding another simple sentence after the conjunction.

1. My cat is stuck in a tree, so _____

2. Candy and soda are delicious, but _____

3. My grandmother likes to garden, and _____


4. We wore funny socks to school today, because _____

5. We can play in my tree house, or _____

Name: _____ Date: _____

ea


Draw your teacher below.



Fill in the 'ea' words below.

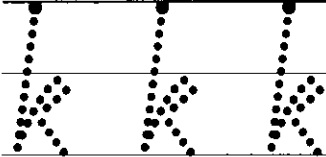

b	_____	k
s	_____	t
m	_____	n
p	_____	s
st	_____	m
cl	_____	n

Draw your dream from last night.



Name: _____


Kk



kick



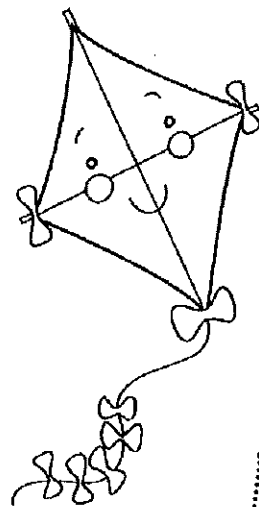
king



kettle



koala



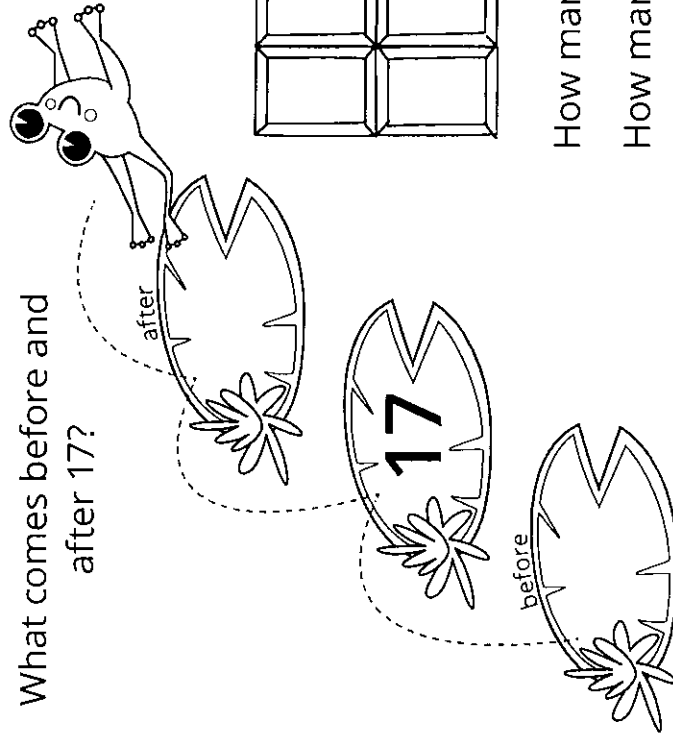
kite

Name: _____ Date: _____


17

seventeen

What comes before and after 17?



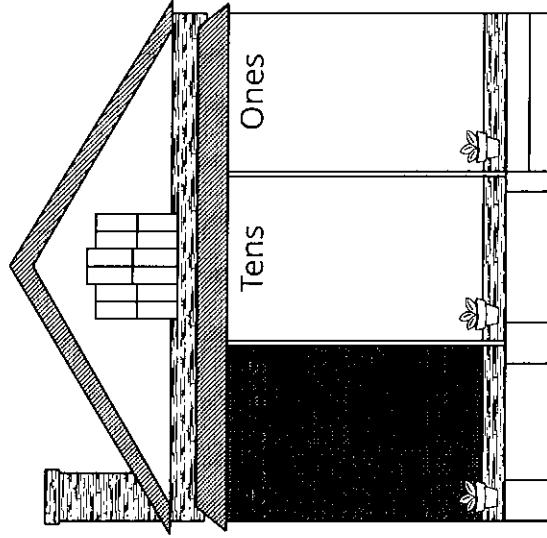
Colour in 17 pieces of this chocolate bar.



How many chocolate squares more than 10? _____


How many chocolate squares less than 20? _____

Write 17 in the correct houses.



Name: _____

Missing Numbers



Fill in the missing numbers.

12 13 ○ ○

24 ○ 26 ○

○ 8 ○ 10

○ ○ 15 16

14 ○ 16 ○

4 ○ ○ 7

○ 25 26 ○

18 19 ○ ○

○ ○ 17 18

○ ○ 27 28

21 ○ ○ 24

10 ○ ○ ○

○ 19 ○ 21

○ 20 ○ 22

Addition to ten.

Finish in your own colours.


WRITE THE SUM

9 rockets and 1 alien.
How many altogether?

8		4
2		3
5		1
3		8
10		3
8		9
4		7
9		2
7		5
1		10

Look for the numbers more than once and colour the picture.

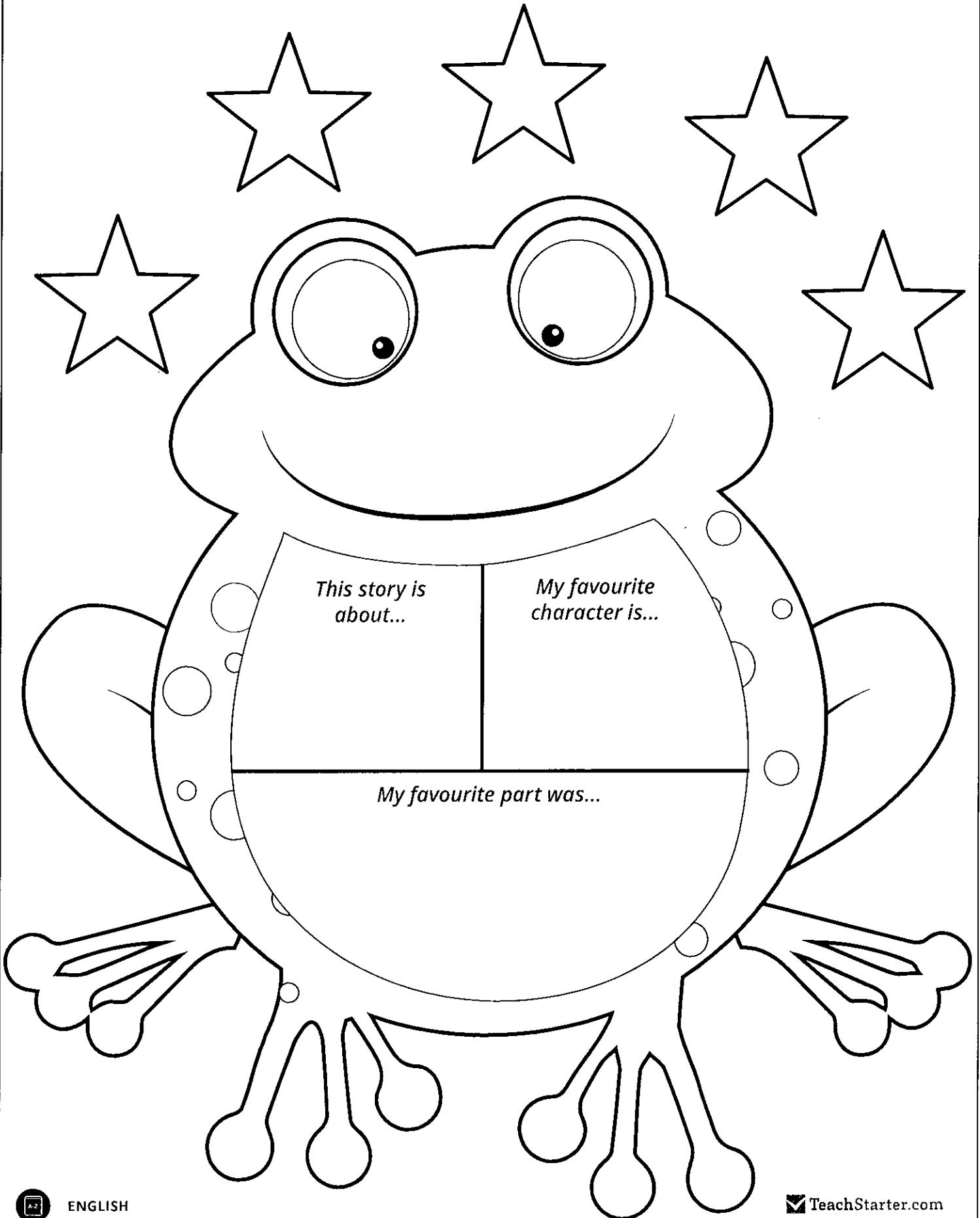
<p>blue</p> $\begin{array}{r} 2 \\ + 2 \\ \hline \end{array}$	<p>green</p> $\begin{array}{r} 3 \\ + 3 \\ \hline \end{array}$	<p>red</p> $\begin{array}{r} 5 \\ + 5 \\ \hline \end{array}$	<p>yellow</p> $\begin{array}{r} 0 \\ + 1 \\ \hline \end{array}$	<p>purple</p> $\begin{array}{r} 5 \\ + 3 \\ \hline \end{array}$
<p>pink</p> $\begin{array}{r} 4 \\ + 1 \\ \hline \end{array}$	<p>orange</p> $\begin{array}{r} 5 \\ + 4 \\ \hline \end{array}$	<p>black</p> $\begin{array}{r} 6 \\ + 1 \\ \hline \end{array}$	<p>brown</p> $\begin{array}{r} 0 \\ + 2 \\ \hline \end{array}$	<p>rainbow</p> $\begin{array}{r} 1 \\ + 2 \\ \hline \end{array}$



MEGANEURA -
GIGANTIC,
PRIMITIVE
DRAGONFLY

Day 1 2

My Book Report for



Name: _____

Date: _____



Compound Sentences



Combine two simple sentences to make a compound sentence.

My birthday is not
until next week

simple sentence

, but

conjunction

we are celebrating
it this Saturday.

simple sentence

Direction: Expand the sentence by adding another simple sentence after the conjunction.

1. Our class went to a museum, and _____

2. Tony eats healthy food, so _____

3. The boys wanted to play outside, but _____

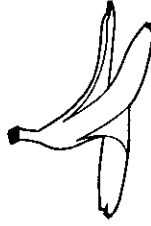
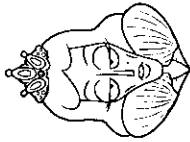
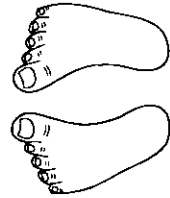

4. My sister made a cake for our Dad, because _____

5. Do you wash your face first, or _____

Name: _____ Date: _____

ee

Fill in the 'ee' words.



sw _ _ p

f _ _ t



qu _ _ n

s _ _ d

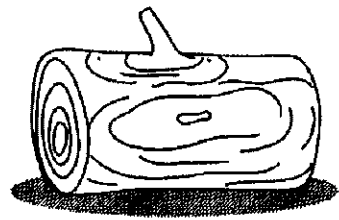




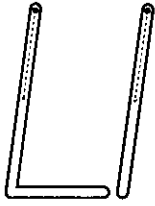
sl _ _ p

p _ _ l

Help the bee get to his honey.





Name: _____



lemon

legs

log



leaf

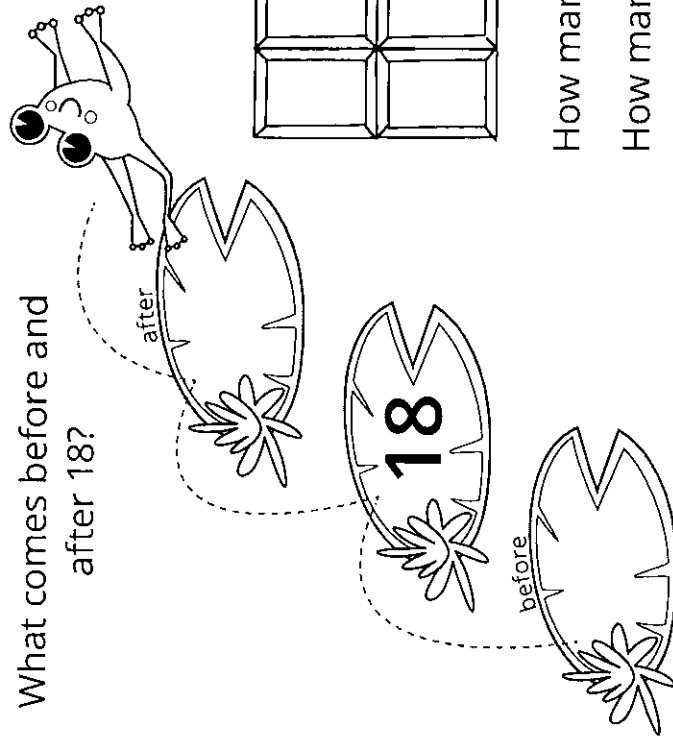
lips

Name: _____ Date: _____


18

sightsees

What comes before and after 18?



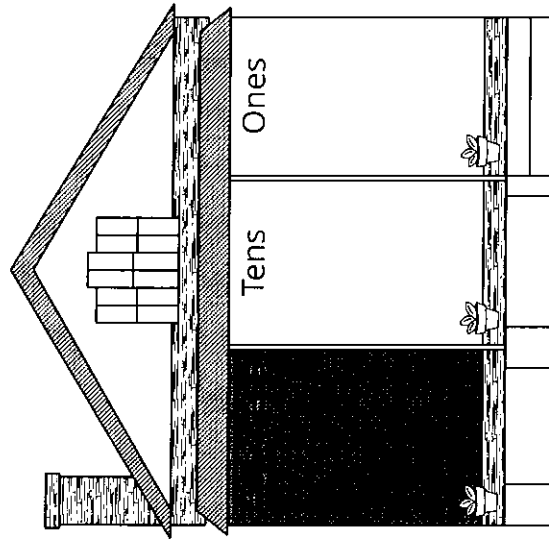
Colour in 18 pieces of this chocolate bar.



How many chocolate squares more than 10? _____

How many chocolate squares less than 20? _____

Write 18 in the correct houses.



Name: _____

Heart Order



Order the numbers from smallest to largest.

13 8 12 16 14

19 11 10 15 7

19 23 21 22 20

16 18 4 12 13

10 6 22 13 17

25 5 15 20 10

18 6 13 3 14

11 20 16 12 9

26 24 22 20 28

28 4 5 17 19

10 27 20 14 30

19 12 30 26 3

Addition to ten.

Finish in your own colours.

WRITE THE SUM


5 dogs and 4 cats.
How many altogether?



Look for the numbers more than once and colour the picture.

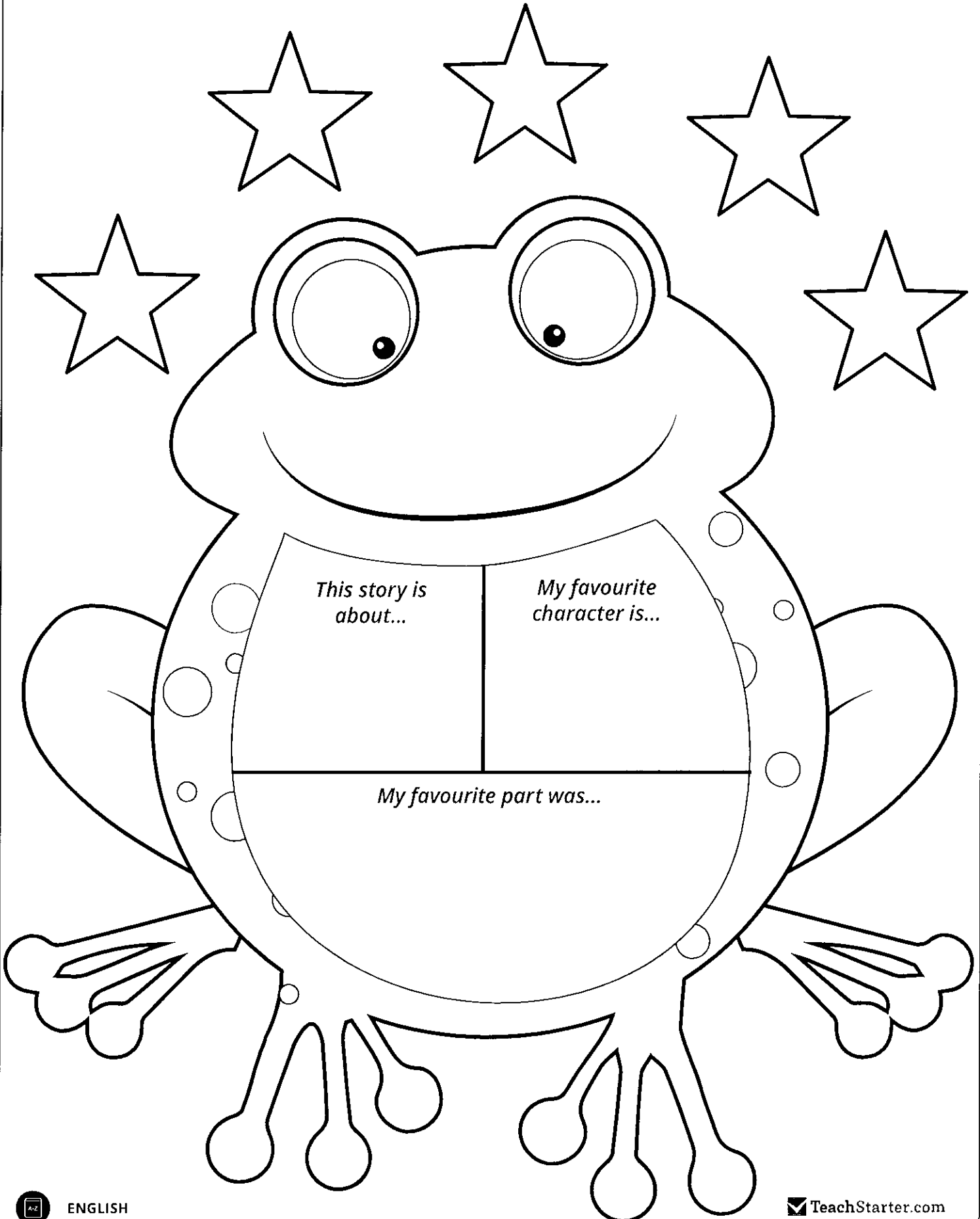
<p>blue</p> $\begin{array}{r} 2 \\ + 4 \\ \hline \end{array}$	<p>green</p> $\begin{array}{r} 2 \\ + 6 \\ \hline \end{array}$	<p>red</p> $\begin{array}{r} 1 \\ + 1 \\ \hline \end{array}$	<p>yellow</p> $\begin{array}{r} 6 \\ + 3 \\ \hline \end{array}$	<p>purple</p> $\begin{array}{r} 3 \\ + 0 \\ \hline \end{array}$
<p>pink</p> $\begin{array}{r} 4 \\ + 3 \\ \hline \end{array}$	<p>orange</p> $\begin{array}{r} 0 \\ + 0 \\ \hline \end{array}$	<p>black</p> $\begin{array}{r} 2 \\ + 8 \\ \hline \end{array}$	<p>brown</p> $\begin{array}{r} 3 \\ + 1 \\ \hline \end{array}$	<p>rainbow</p> $\begin{array}{r} 3 \\ + 2 \\ \hline \end{array}$

PLESIOSAUR




Day 13

My Book Report for



Name: _____ Date: _____

Word Order



Direction: Unscramble the words or phrases in the boxes and write the sentence correctly on the line.

1. to go library? Can the I

2. at She's good flute. the playing

3. to be when wants up. He he grows a pilot

4. globes. snow I collect

5. fell Lenny knee. cut his and



Name: _____ Date: _____

Four horizontal lines for writing the name and date.

oi

Put 'oi' in the blank spaces to complete the sentences below.



A pig goes _____ nk.

Protect food by wrapping it in tinf _____ l.

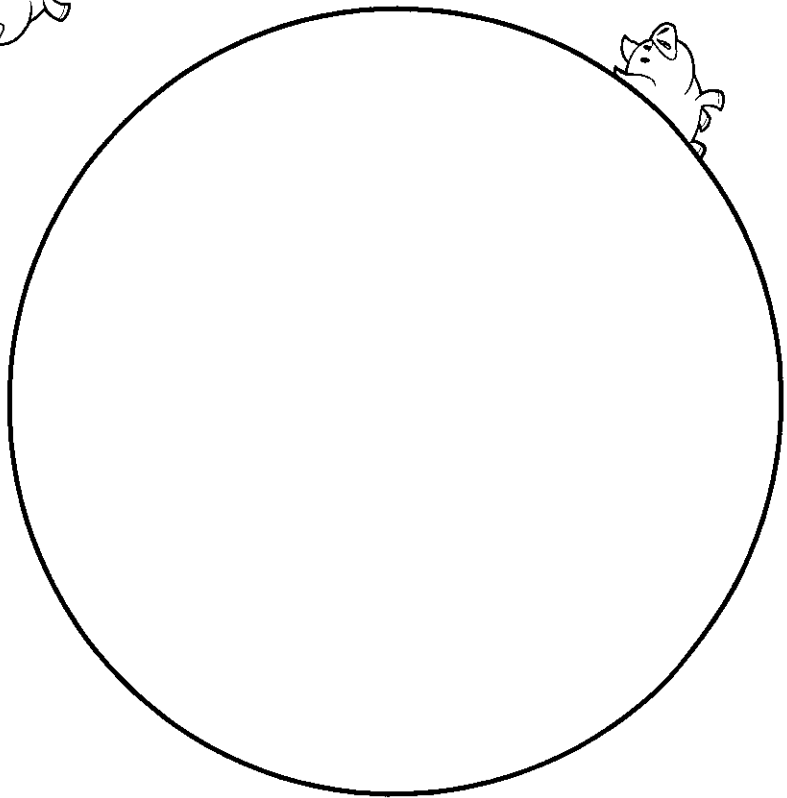
When you sing, you need to use a clear v _____ ce.

To buy lollies, you will need a \$2 c _____ n.

May I please be excused to go to the t _____ let?

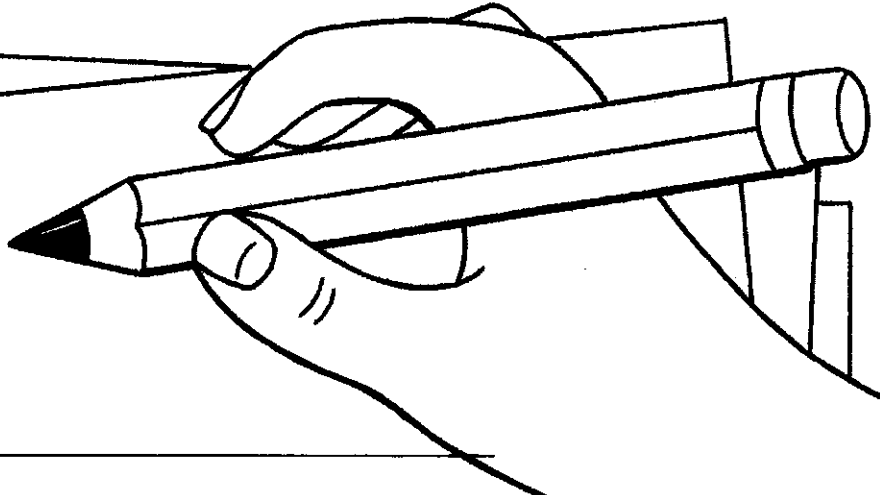
Plant a seed in s _____ l and it may grow.

Design your own coin below.



Name: _____


Mm




m m m




moon



mat



mop



mug



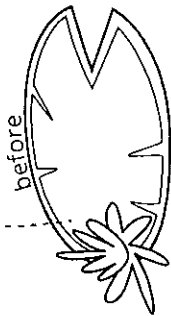
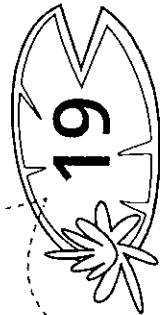
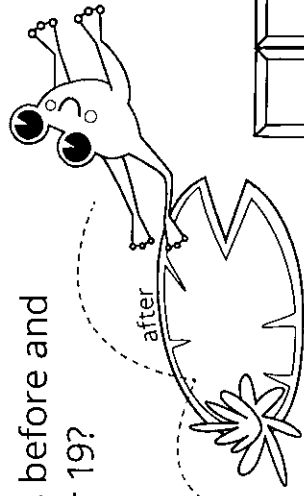
man

Name: _____ Date: _____


19

nineteen

What comes before and after 19?



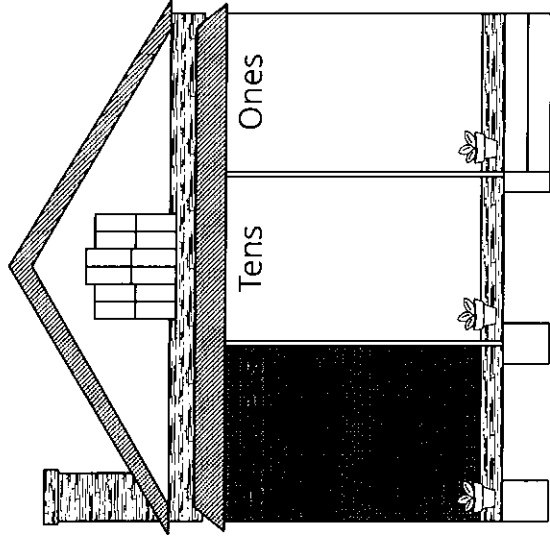
Colour in 19 pieces of this chocolate bar.



How many chocolate squares more than 10? _____

How many chocolate squares less than 20? _____

Write 19 in the correct houses.




Name: _____

Sorting Numbers

Less than 20

More than 20



© My Teaching Pal

22

31

17

25

6

10

27

13

29

18

32

12

33

23

14

30

19

24

5

26

3

16

28

21

Addition to ten.

Finish in your own colours.

WRITE THE SUM

3 cars and 6 trucks.
How many altogether?



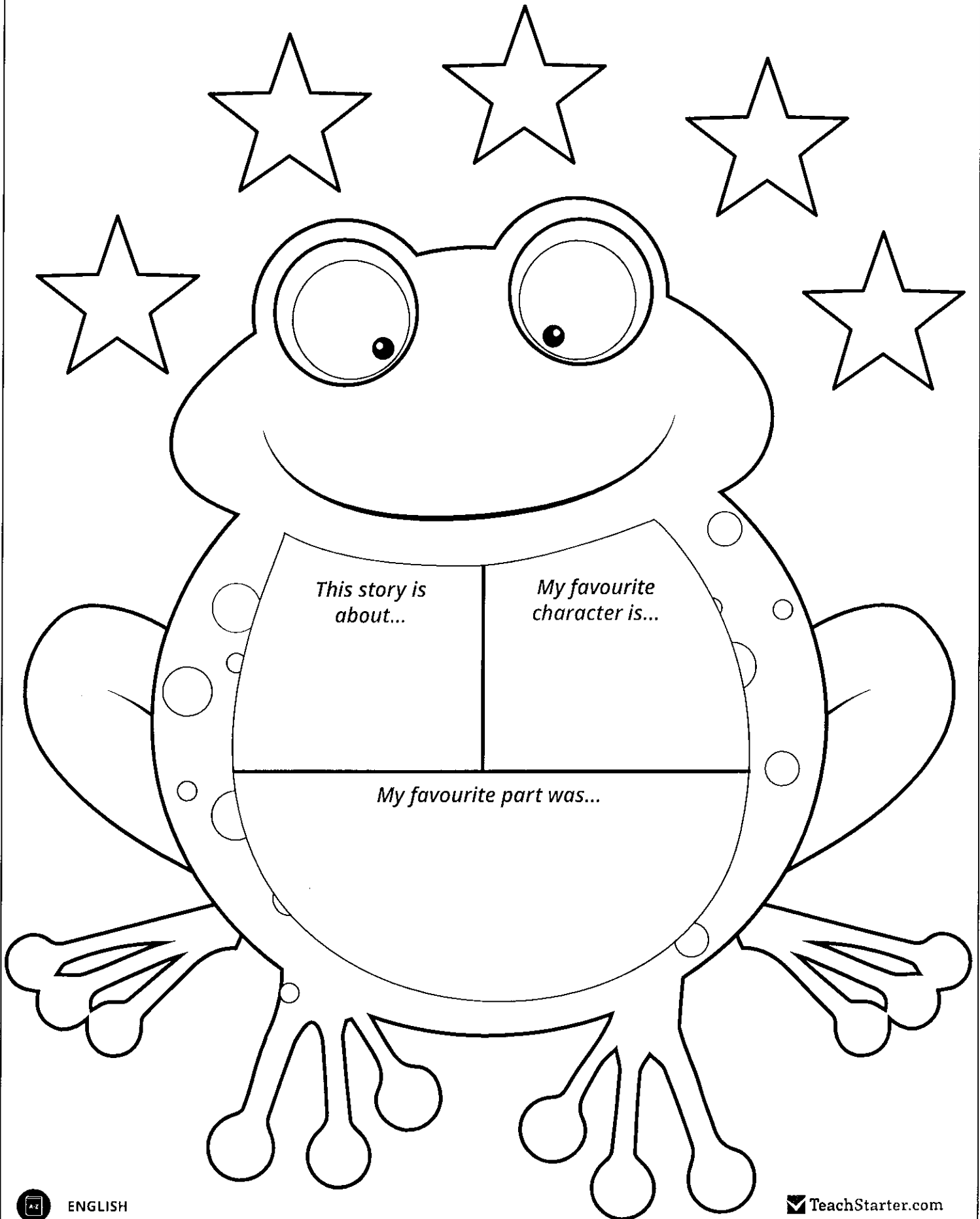
Look for the numbers more than once and colour the picture.

<p>blue</p> $\begin{array}{r} 1 \\ + 1 \\ \hline \end{array}$	<p>green</p> $\begin{array}{r} 7 \\ + 3 \\ \hline \end{array}$	<p>red</p> $\begin{array}{r} 2 \\ + 5 \\ \hline \end{array}$	<p>yellow</p> $\begin{array}{r} 8 \\ + 1 \\ \hline \end{array}$	<p>purple</p> $\begin{array}{r} 2 \\ + 3 \\ \hline \end{array}$
<p>pink</p> $\begin{array}{r} 2 \\ + 1 \\ \hline \end{array}$	<p>orange</p> $\begin{array}{r} 1 \\ + 0 \\ \hline \end{array}$	<p>black</p> $\begin{array}{r} 4 \\ + 4 \\ \hline \end{array}$	<p>brown</p> $\begin{array}{r} 3 \\ + 1 \\ \hline \end{array}$	<p>rainbow</p> $\begin{array}{r} 4 \\ + 2 \\ \hline \end{array}$



Day 4

My Book Report for




This story is about...

My favourite character is...

My favourite part was...

Name: _____ Date: _____

Rearrange the Sentences



Sentences can be rearranged like the following:

I read about penguins, and I read about dolphins.

I read about dolphins, and I read about penguins.

Direction: Read the sentence and change the word order.

1. Ned likes apples, and Jen likes bananas.

2. The cat slept on the carpet, and the dog slept on the sofa.

3. Suddenly, it started to rain.


4. I can quickly make it for you.

5. We went to the zoo on Saturday.


Name: _____ Date: _____

oy

Fill in the 'oy' words below.



j _ _ _



r _ _ al



b _ _ _



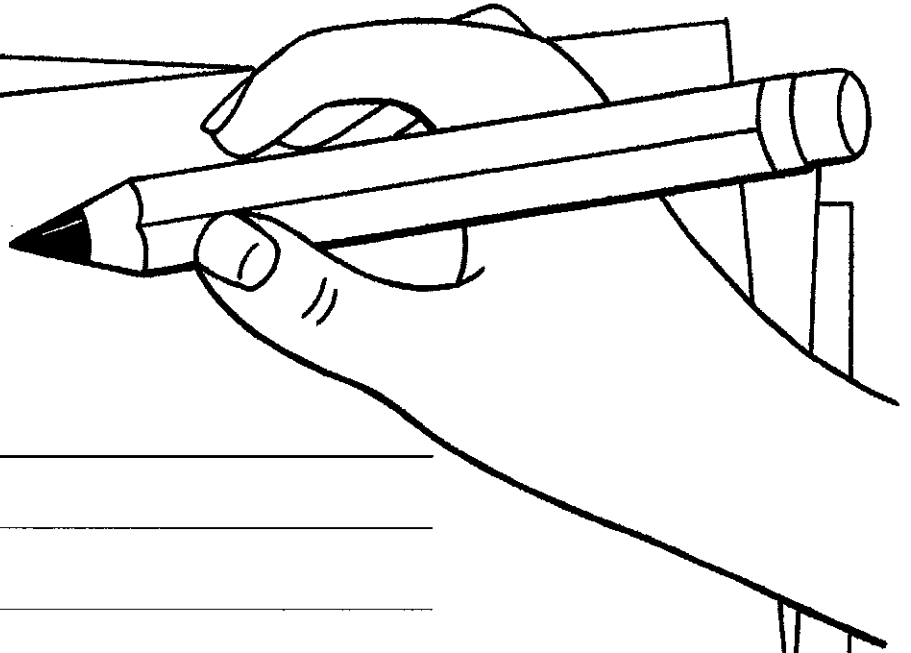
t _ _ _

In the box below, draw something you enjoy doing.


Large empty rectangular box for drawing.

Name: _____


Nn



n n n




net




nut



nest



nurse



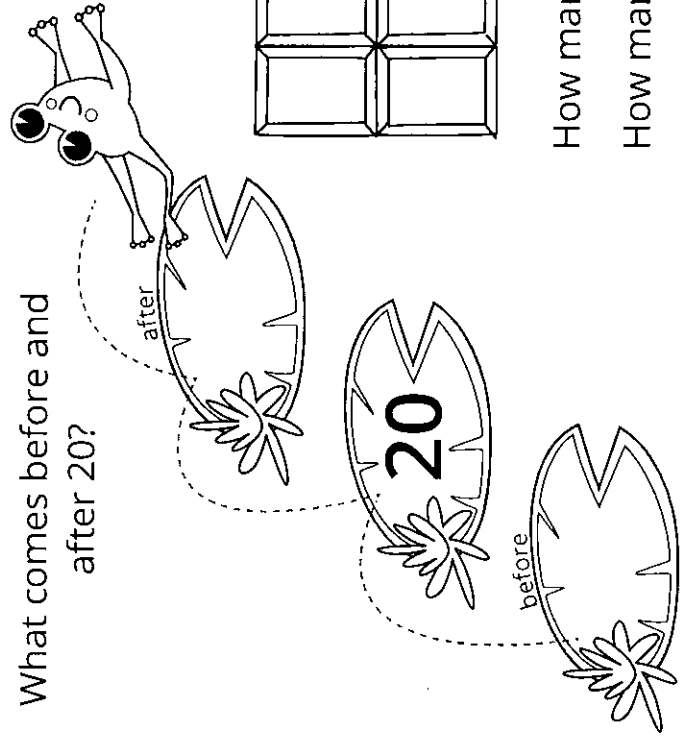
numbat

Name: _____ Date: _____


20

twenty

What comes before and after 20?

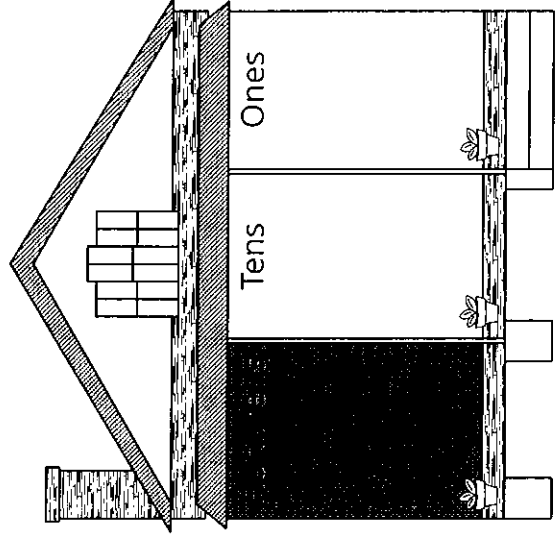


Colour in 20 pieces of this chocolate bar.



How many chocolate squares more than 10? _____
How many chocolate squares less than 20? _____


Write 20 in the correct houses.



Name: _____

Find the Pattern

Continue the number patterns.



2	4	6	8				
---	---	---	---	--	--	--	--

10	9	8	7				
----	---	---	---	--	--	--	--

3	6	9	12				
---	---	---	----	--	--	--	--

7	9	11	13				
---	---	----	----	--	--	--	--

5	10	15	20				
---	----	----	----	--	--	--	--

20	18	16	14				
----	----	----	----	--	--	--	--

2	5	9	14				
---	---	---	----	--	--	--	--

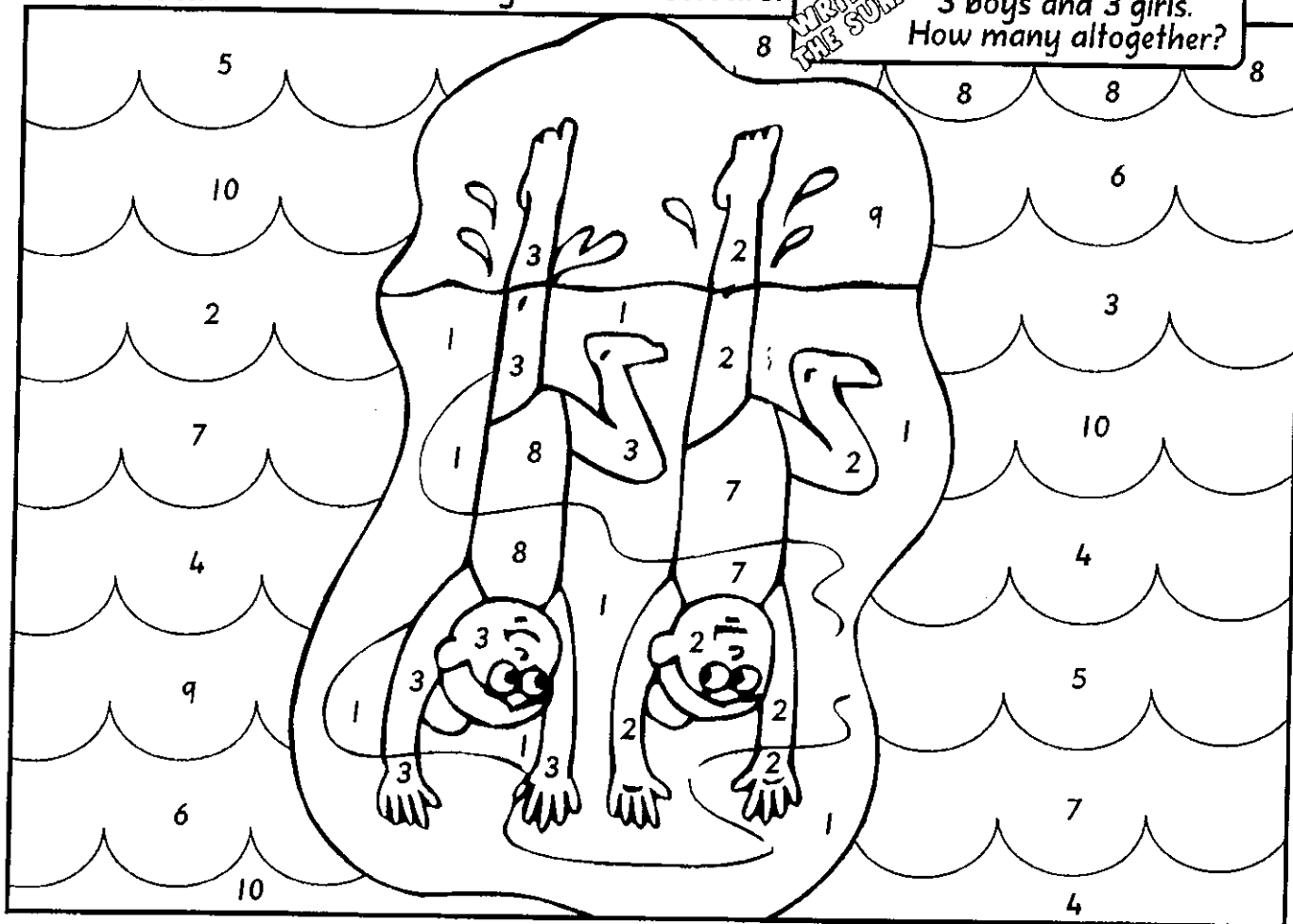
40	35	30	25				
----	----	----	----	--	--	--	--

Addition to ten.

Finish in your own colours.

WRITE THE SUM

3 boys and 3 girls.
How many altogether?



Look for the numbers more than once and colour the picture.

<p>blue</p> $\begin{array}{r} 5 \\ + 4 \\ \hline \end{array}$	<p>green</p> $\begin{array}{r} 0 \\ + 1 \\ \hline \end{array}$	<p>red</p> $\begin{array}{r} 3 \\ + 5 \\ \hline \end{array}$	<p>yellow</p> $\begin{array}{r} 0 \\ + 3 \\ \hline \end{array}$	<p>purple</p> $\begin{array}{r} 1 \\ + 4 \\ \hline \end{array}$
<p>pink</p> $\begin{array}{r} 2 \\ + 0 \\ \hline \end{array}$	<p>orange</p> $\begin{array}{r} 5 \\ + 5 \\ \hline \end{array}$	<p>black</p> $\begin{array}{r} 2 \\ + 2 \\ \hline \end{array}$	<p>brown</p> $\begin{array}{r} 3 \\ + 3 \\ \hline \end{array}$	<p>rainbow</p> $\begin{array}{r} 6 \\ + 1 \\ \hline \end{array}$

PTERYGOTRUS-GIANT SEA SCORPION

