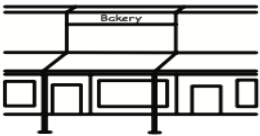



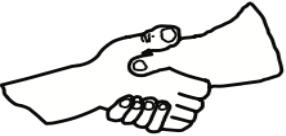





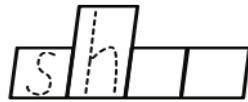
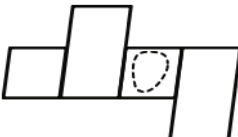



LITERACY HOMEWORK

Year 3B & 3/4W PHONICS - Term 2 - Week 8 - Due Thursday

Use the LOOK, COVER, WRITE and CHECK method to write your spelling words each night.

Word	Monday	Tuesday	Wednesday	Thursday
shut				
shell				
ship				
shop				
shot				

<p>shop</p> 	<p>__ot</p> 	<p>__ed</p> 	<p>__ip</p> 
<p>shake</p> 	<p>__irt</p> 	<p>__ell</p> 	<p>__oe</p> 
			
<p>The shop sells shells.</p> 			
<p>The _____</p>			


Insert the missing word for each sentence.

1. The _____ put was very heavy.
2. The _____ had beautiful colours.
3. I can see the _____ sail on the water.
4. We need to go to the _____ tomorrow.


MATHS HOMEWORK

Year 3B & 3/4W PHONICS - Term 2 - Week 8 - Due Thursday

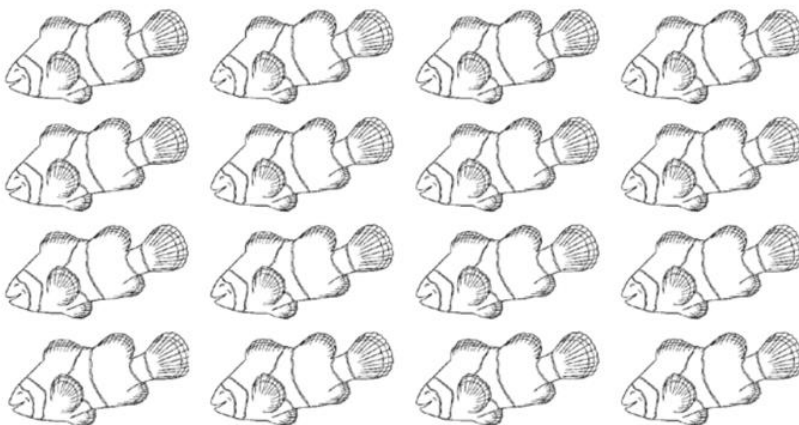
Colour $\frac{1}{4}$ yellow and $\frac{3}{4}$ red.



Colour $\frac{1}{3}$



Colour $\frac{3}{4}$



What fraction is not coloured?

Write your 3 times tables.

$$1 \times 3 = 3$$

$$2 \times 3 = 6$$

$$3 \times 3 =$$

$$4 \times 3 =$$

$$5 \times 3 =$$

$$6 \times 3 =$$

$$7 \times 3 =$$

$$8 \times 3 =$$

$$9 \times 3 =$$

$$10 \times 3 =$$

$$11 \times 3 =$$

$$12 \times 3 =$$

$$20 - 5 =$$

$$25 - 5 =$$

$$27 - 5 =$$

$$50 - 5 =$$

$$40 - 5 =$$

$$29 - 5 =$$

$$46 - 5 =$$

$$88 - 5 =$$

$$23 - 5 =$$

$$90 - 7 =$$

Log into Mathletics and complete 1 task.