









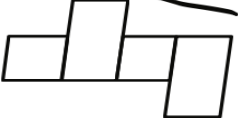
LITERACY HOMEWORK

Year 3B & 3/4W PHONICS - Term 2 - Week 5 - Due Thursday

Use the LOOK, COVER, WRITE and CHECK method to write your spelling words each night.

Word	Monday	Tuesday	Wednesday	Thursday
wheel				
whip				
white				
when				
where				

	<i>whip</i> _____	<i>whip</i> _____
	<i>where</i> _____	<i>where</i> _____
	<i>when</i> _____	<i>when</i> _____
	<i>white</i> _____	<i>white</i> _____
	<i>wheel</i> _____	<i>wheel</i> _____

Read then draw a line to match the correct picture.



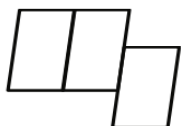
is my hat?



I sing



I work.



are you crying?

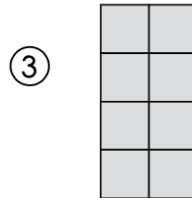
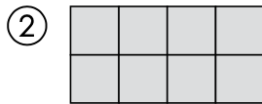
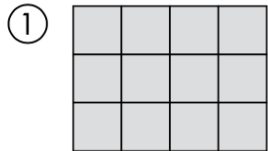
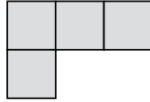


MATHS HOMEWORK

Year 3B & 3/4W PHONICS - Term 2 - Week 5 - Due Thursday

Area is the number of **square units** that will fit inside a figure.

The area of this figure is **4 square units**.

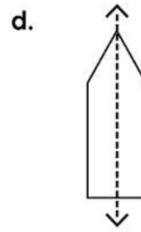
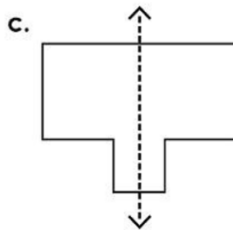
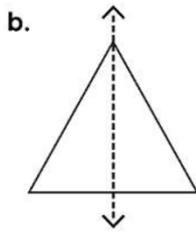
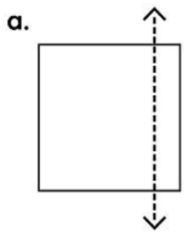


Area = _____

Area = _____

Area = _____

Tell whether the dotted line on each shape is a line of symmetry. Write **yes** or **no**.



If each ball costs \$10, how much will 4 balls cost?

Balls \$10 each



Log into Mathletics and complete 3 tasks.



Write your 5 times tables.

$$1 \times 5 = 5$$

$$2 \times 5 =$$

ADDING

$$10 + 5 =$$

$$2 + 15 =$$

$$20 + 5 =$$

$$40 + 6 =$$

$$32 + 3 =$$

$$100 + 5 =$$

$$120 + 10 =$$

$$145 + 5 =$$

$$205 + 5 =$$

$$250 + 40 =$$

$$299 + 1 =$$