




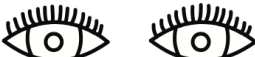




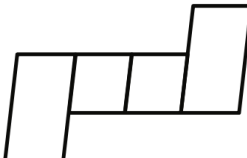



LITERACY HOMEWORK

Year 3B & 3/4W PHONICS - Term 2 - Week 4 - Due Thursday

Use the LOOK, COVER, WRITE and CHECK method to write your spelling words each night.

Word	Monday	Tuesday	Wednesday	Thursday
good				
book				
cook				
look				
foot				

c _ _ k 	b _ _ k 	f _ _ t 	g _ _ d 
h _ _ d 	l _ _ k 	h _ _ k 	w _ _ d 
			

Insert the missing word for each sentence.

- I like to read my favourite _____ in bed.
- Can you help me _____ for my hat?
- We had to chop the _____ for the fire.
- We are going to _____ a yummy breakfast.
- My _____ is so sore from walking.

MATHS HOMEWORK

Year 3B & 3/4W PHONICS - Term 2 - Week 4 - Due Thursday

Emma put her watch on upside down.
When she looked at it she saw this.

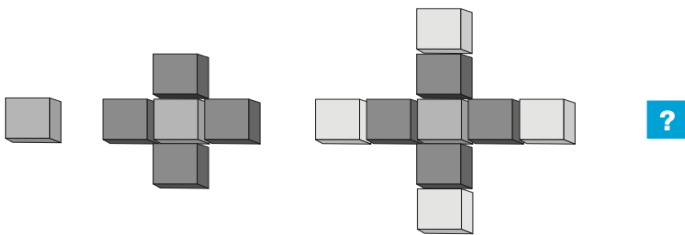


tel:12%2013%2014%2016

At what time did she look at her watch?

- 1:30
 2:30
 1:06
 7:00

Lara used blocks to make a pattern.



She used 1 block in her first shape, 5 blocks in her second shape and 9 blocks in her third shape.

How many blocks are in the next shape in Lara's pattern?

- 12
 13
 14
 16

Josh went to the dentist on 8 June.
He has to visit the dentist again in exactly 2 weeks.

When will Josh visit the dentist again?

- 10 June
 15 June
 21 June
 22 June

June						
S	M	T	W	T	F	S
			1	2	3	4
5	6	7	8	9	10	11
12	13	14	15	16	17	18
19	20	21	22	23	24	25
26	27	28	29	30		

COMPLETE
Circle all the EVEN
numbers.

26

43

88

101

19

1,452

50

97

766

256

900

11,954

Log into Mathletics and
complete 3 tasks.

