

# LITERACY HOMEWORK




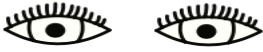

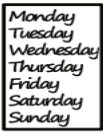





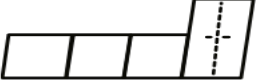
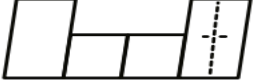
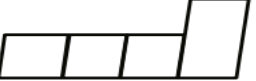
Year 3B & 3/4W PHONICS - Term 2 - Week 2 - Due Thursday

Use the LOOK, COVER, WRITE and CHECK method to write your spelling words each night.

Word	Monday	Tuesday	Wednesday	Thursday
feet				
see				
meet				
week				
keep				

Insert the missing word for each sentence.

1. I can \_\_\_\_\_ the moon in the night sky.
2. My \_\_\_\_\_ are too big from my shoes.
3. Can you \_\_\_\_\_ me at the train station?
4. Next \_\_\_\_\_ we will be on school holidays.

  sleep	see _____ feet _____ meet _____ week _____ keep _____	see _____ feet _____ meet _____ week _____ keep _____	
f _ _ t 	s _ _ _ 	m _ _ t 	w _ _ k 
p _ _ l 	f _ _ l 	r _ _ l 	k _ _ p 
			

# MATHS HOMEWORK

Year 3B & 3/4W PHONICS - Term 2 - Week 2 - Due Thursday

Colour the bubble showing the correct answer.

Which of these is equal to  $3 + 4$ ?

$4 + 3$



$4 \times 3$



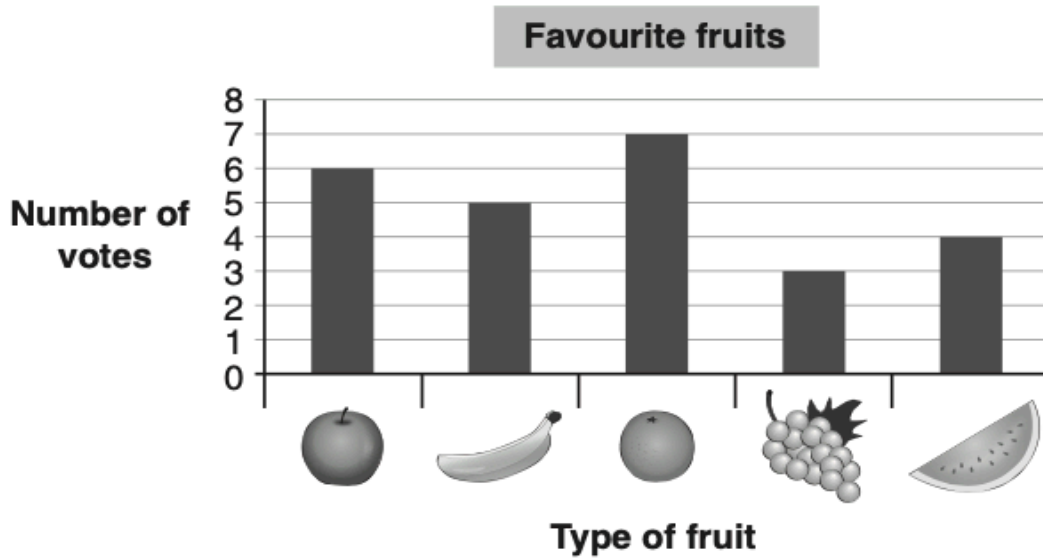
$4 \div 3$




$4 - 3$



Each student in a class voted for their favourite fruit.



How many students voted for  ?

4



5



6



7



Log into Mathletics and complete 3 tasks.

