

**YEAR 3B & 3/4W HOMEWORK LITERACY**  
**TERM 2 /WEEK 8 - Due Thursday**  
**Read, cover, write, check your spelling list words.**



List 1	List 2	List 3	List 4	Extension
orange nature judge large catch	stretch capture culture porch courage	postage checkers arrange jacket bridge	whose dessert supper furniture imaginary	singe skipper squirm tackle tarnish

Write the nouns in List 1 and List 2.

List 1: \_\_\_\_\_

List 2: \_\_\_\_\_

Write the adjectives from List 1: \_\_\_\_\_

Write the words that would involve food: \_\_\_\_\_

Synonyms are words that have a similar meaning to another word e.g. small/ tiny/ little  
**Find the synonyms from your spelling list for the following words:**

brave: \_\_\_\_\_

trap: \_\_\_\_\_

verandah: \_\_\_\_\_

orderly: \_\_\_\_\_

big: \_\_\_\_\_

dinner: \_\_\_\_\_

wiggle: \_\_\_\_\_

mail: \_\_\_\_\_



Describe your favourite dessert using many different adjectives.



**YEAR 3B & 3/4W HOMEWORK LITERACY**

**TERM 2 / Due Thursday**

**Read, cover, write, check your spelling list words.**

**Weekend**



**Monday**


**Tuesday**


**Wednesday**


# YEAR 3B & 3/4W HOMEWORK MATHS

## TERM 2 /WEEK 8 - Due Thursday



Complete the following subtraction questions.

a.		b.		c.		d.		e.	
	3 3		2 5		1 6		2 7		2 9
-	1 1	-	1 3	-	1 0	-	1 6	-	1 2
f.		g.		h.		i.		j.	
	2 6		3 2		2 9		4 2		2 7
-	1 3	-	2 0	-	1 4	-	1 2	-	2 3


Write your  
**3 times table**  
and  
**4 times table**  
in your  
homework  
book.

$$\begin{array}{r} 23 \\ + 45 \\ \hline \end{array}$$

$$\begin{array}{r} 123 \\ + 456 \\ \hline \end{array}$$

$$\begin{array}{r} 38 \\ + 45 \\ \hline \end{array}$$

Colour  $\frac{1}{4}$  yellow and  $\frac{3}{4}$  red.



Circle all the even numbers

4785

3883

7741

8004


2000

9672

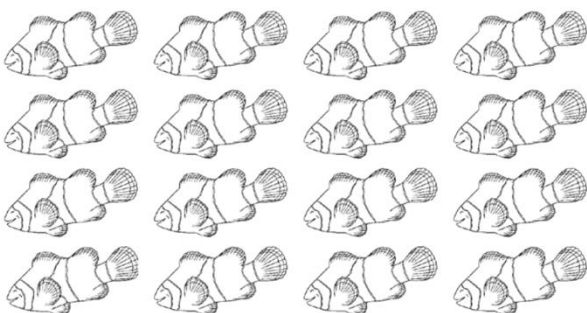
9999

1056

Colour  $\frac{1}{3}$



Colour  $\frac{3}{4}$



What fraction is not coloured? .....

The table shows the number of animals on Joan's farm.

1) How many sheep on Joan's farm? \_\_\_\_\_

2) How many pigs and chickens on Joan's farm?  
\_\_\_\_\_

Animals on Joan's Farm	
Animals	Number
sheep	31
horses	8
cows	18
pigs	12
chickens	24

Log into Mathletics and complete 3 tasks.

