

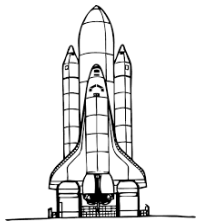
YEAR 3B & 3/4W HOMEWORK LITERACY
TERM 2 /WEEK 7 - Due Thursday
Read, cover, write, check your spelling list words.



| List 1 | List 2 | List 3 | List 4 | Extension |
|--|--|--|---|--|
| cabin park week crack rocket | ticket ache insect freckles collapse | comics second quick camera octopus | there <u>their</u> they're breakfast continue | proudly reindeer rissole salami salmon |

Complete the following sentences.

- There are 7 days in a _____.
- NASA sent a _____ into space to check on the satellite.
- An _____ has eight legs and it can move very fast.
- He _____ showed his parents the award he received for being Student of the Week.
- The bear patiently waited for the _____ to swim upstream before catching it.
- Anne of Green Gables has the cutest _____ on her face.



Find the matching word for the following definitions:

This mechanism has a lens and shutter to capture photos. _____


The most important meal of the day. _____

To enter a movie theatre you will need to show this piece of paper. _____

A type of curd meat that is sold in slices at the deli _____



Research five (5) facts about **a reindeer**.



YEAR 3B & 3/4W HOMEWORK LITERACY

TERM 2 / Due Thursday

Read, cover, write, check your spelling list words.

Weekend

| | | | | |
|--|--|--|--|--|
| | | | | |
| | | | | |
| | | | | |
| | | | | |
| | | | | |

Monday

| | | | | |
|--|--|--|--|--|
| | | | | |
| | | | | |
| | | | | |
| | | | | |
| | | | | |

Tuesday


| | | | | |
|--|--|--|--|--|
| | | | | |
| | | | | |
| | | | | |
| | | | | |
| | | | | |

Wednesday

| | | | | |
|--|--|--|--|--|
| | | | | |
| | | | | |
| | | | | |
| | | | | |
| | | | | |

YEAR 3B & 3/4W HOMEWORK MATHS

TERM 2 /WEEK 7 - Due Thursday



Complete the following find the missing number for each.

1. $16 + \square = 27$

2. $38 - \square = 26$

3. $\square - 18 = 36$

4. $\square + 17 = 66$

5. $38 + \square = 73$

6. $87 - \square = 53$

7. $6 + \square + 8 = 24$

Convert the following lengths.
Remember $100\text{cm} = 1\text{m}$

$1\text{m} = \underline{\hspace{2cm}} \text{cm}$

$2.5\text{m} = \underline{\hspace{2cm}} \text{cm}$

$0.5\text{m} = \underline{\hspace{2cm}} \text{cm}$

$350\text{cm} = \underline{\hspace{2cm}} \text{m}$

$700\text{cm} = \underline{\hspace{2cm}} \text{m}$

$550\text{cm} = \underline{\hspace{2cm}} \text{m}$

Colour half of the shape.



Write the fraction for the part that is coloured.

Write your
5 times table
and
10 times table
in your homework
book.

Write them in
reverse as well

$10 \times 1 = 10,$

$10 \times 2 = 20$

$10 \times 3 = 30$

Log into Mathletics and complete 3 tasks.

Mathletics