

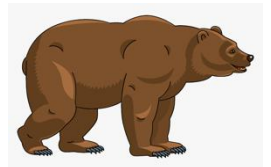
YEAR 3B & 3/4W HOMEWORK LITERACY
TERM 2 /WEEK 5 - Due Thursday
Read, cover, write, check your spelling list words.



List 1	List 2	List 3	List 4	Extension
ant aunt there <u>their</u> they're	brake break your you're beat	beet sail sale bare bear	license distance yesterday clothes close	janitor jovial kiosk legend lizard

Homophones are words that sounds the same, however they are written and differently and have different meanings. Complete the following by choosing the correct homophone.

1. My favourite _____ Gladys is coming over to celebrate my birthday.
2. The _____ is one of the strongest insects alive because of the weight it can carry.
3. We went on a camp at Yarramundi and it was really fun over _____.
4. _____ car was parked in the wrong spot.
5. Old Mother Hubbard opened the cupboard, but sadly it was _____.
6. The grizzly _____ pulled down the beehive to eat the honey.



Find the matching word for the following definitions:

When something you drop is shattered to pieces. _____

A store we can purchase food and drinks from during carnivals. _____

We need to wear these to protect our bodies from the elements. _____

When on water this vessel needs an item to catch the wind so it propels forward. _____

Measuring the difference in kilometres between two points. _____



Find a word from your list you don't know the meaning. Look it up in the dictionary then write the definition in this box.

YEAR 3B & 3/4W HOMEWORK LITERACY
TERM 2 / Due Thursday
Read, cover, write, check your spelling list words.

Weekend				


Monday				

Tuesday				

Wednesday				


YEAR 3 & 3/4W HOMEWORK MATHS

TERM 2 /WEEK 5 - Due Thursday



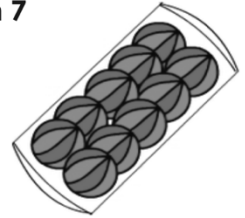
Complete the following and make sure you show your working out.

1 During the air show 10 planes flew past each hour for 4 hours. How many planes flew past altogether?



A:

2 There are 10 balls in a set. How many balls in 7 sets?



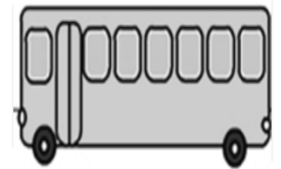
A:

3 There are 10 children in each team. How many children in 9 teams?



A:

4 10 students boarded each of 5 buses for an excursion to the zoo. How many students went to the zoo?



A:

a.				b.				c.				d.				e.			
	1	4			5	2			5	4			3	2			1	0	
+	2	3		+	4	1		+	4	5		+	3	2		+	4	4	
f.				g.				h.				i.				j.			
	5	4			7	4			6	3			2	1			3	8	
+	3	2		+	2	1		+	2	4		+	3	7		+	3	1	

Write your 3 times tables and 10 times tables in your homework book.

Log into Mathletics and complete 3 tasks.