






LITERACY HOMEWORK


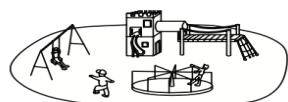


Year 3B & 3/4W PHONICS - Term 2 - Week 1 - Due Thursday

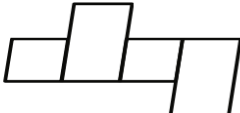
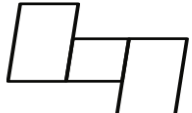
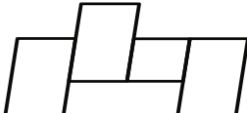
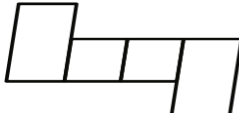

Use the LOOK, COVER, WRITE and CHECK method to write your spelling words each night.

Word	Monday	Tuesday	Wednesday	Thursday
say				
play				
may				
day				
way				

 <i>ay</i> tray	<i>day</i> _____	<i>day</i> _____
	<i>say</i> _____	<i>say</i> _____
	<i>may</i> _____	<i>may</i> _____
	<i>way</i> _____	<i>way</i> _____
	<i>play</i> _____	<i>play</i> _____

<i>s</i> ___	<i>m</i> ___	<i>w</i> ___	<i>d</i> ___
			

<i>h</i> ___	<i>pl</i> ___	<i>cl</i> ___	<i>tr</i> ___
			

				
---	---	---	--	---

Insert the missing word for each sentence.

- We go to the park and _____ on the swing.
- The sun shines in the sky during the _____.
- Can you _____ that again please?
- Which _____ did he go?

MATHS HOMEWORK

Year 3B & 3/4W PHONICS - Term 2 - Week 1 - Due Thursday

Colour the bubble showing the correct answer.

Jack's football game is tomorrow.
Today is Thursday.

Which of these is certain?

- Jack's team will win.
 - It will rain during the game.
 - Tomorrow is Friday.
 - Jack trains on Wednesday.
-

$200 + 60 + 3 = ?$

200 603

20 063

2 603

263

How long is half an hour?

- 15 seconds
 - 15 minutes
 - 30 seconds
 - 30 minutes
 - 50 minutes
-

$47 + 16 = ?$

53

62

63

513