



LITERACY HOMEWORK

Year 3B & 3/4W Phonics - Term 1 - Week 6 - Due Thursday



Use the LOOK, COVER, WRITE and CHECK method to write your spelling words each night.

Word	Weekend	Monday	Tuesday	Wednesday
spot				
spin				
spat				
spun				
spill				

Write the correct spelling word in the sentence.

1. Did you _____ the milk on the floor?
2. The camel _____ at the zookeeper.
3. The spider _____ the beautiful web between the trees.
4. The dog had a black _____ on its belly.
5. Jack can _____ a basketball on his finger.

Draw a line to match the picture to the word.



spot

spun

spot

spat

spin

Choose a word from your list and write an interesting sentence. Circle the noun in your sentence. A noun is a name we give to things around us e.g: boy, dog, table, milk, hair, nose

MATHS Homework


Year 3B & 3/4W - Term 1 - Week 6 - DUE THURSDAY



Colour the bubble showing the correct answer.

The seesaw is not moving, so this picture shows Tammy is:

Shade one bubble.




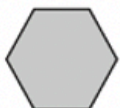
- Heavier than Raj
- Taller than Raj
- Younger than Raj
- Shorter than Raj

Claire borrowed 7 library books and Rohan borrowed 8 library books.
Which number sentence shows the number of books they borrowed altogether?

- $8 - 7 = 1$
- $7 + 8 = 15$
- $8 + 1 = 9$
- $7 - 8 = 1$

Shade one bubble.

Draw a line to match each shape to its name.



square

triangle

rectangle

pentagon

hexagon

circle

octagon

rhombus



Write the answers:

$10 + 4 = \underline{\quad}$

$15 + 5 = \underline{\quad}$

$17 + 4 = \underline{\quad}$

$18 + 2 = \underline{\quad}$

$12 + 8 = \underline{\quad}$

$19 + 1 = \underline{\quad}$

$20 + 0 = \underline{\quad}$