

# LITERACY HOMEWORK

Year 3B & 3/4W Phonics - Term 1 - Week 5 - Due Thursday

Use the LOOK, COVER, WRITE and CHECK method to write your spelling words each night.

Word	Weekend	Monday	Tuesday	Wednesday
snow				
snip				
snap				
snug				
snag				

Draw a line from the picture to the matching word.



snap

snug

snow

snip

Choose one word from your spelling list and write an interesting sentence. Draw a picture to illustrate.

# MATHS Homework

Year 3B & 3/4W - Term 1 - Week 5 - DUE THURSDAY



Colour the bubble showing the correct answer.

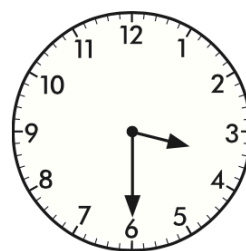
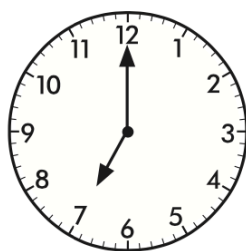
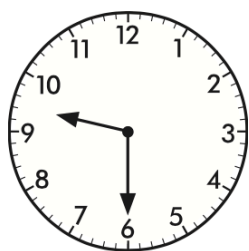
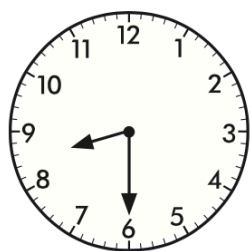
Twelve thousand is the same as:

- 1200
- 120
- 12 000
- 120 000

Which number comes after 4 811 and before 5 273?

- 4 715
- 4 802
- 5 269
- 5 830

Draw a line to connect each of these clocks to the matching times:



half past 3

7 o'clock

half past 8

half past 9

Circle 4 groups of 3.

How many stars are there all together? \_\_\_\_\_



Write the answers for these addition sentences:

1.  $10 + 2 =$  \_\_\_\_\_

2.  $10 + 4 =$  \_\_\_\_\_

3.  $10 + 3 =$  \_\_\_\_\_

4.  $10 + 7 =$  \_\_\_\_\_

5.  $10 + 5 =$  \_\_\_\_\_

6.  $10 + 6 =$  \_\_\_\_\_