


YEAR 3B & 3/4W HOMEWORK LITERACY  
TERM 1 /WEEK 10 - Due Thursday  
Read, cover, write, check your spelling list words.



List 1	List 2	List 3	List 4
kept write cute cube mask	fossil metal join however graph	raise remember whisper moon become	option octagon divide beanstalk flame

1. The kitten looked so \_\_\_\_\_ rolling around on the floor.
2. You need to \_\_\_\_\_ quietly when reading in the library.
3. We were looking forward to the picnic \_\_\_\_\_ the rain ruined the day.
4. My teacher likes to read the narratives we \_\_\_\_\_ in class.
5. At the Australian Museum we looked for the dinosaur \_\_\_\_\_.
6. We were given the \_\_\_\_\_ to play netball or volleyball for sport.



Colour the correct bubble for your answer:

Which word describes how the cat stepped?

The cat climbed out of the window and stepped carefully onto the steep roof.

- climbed
- out
- carefully
- steep

Write the correct spelling for these words:

I saw a (frogg) jump into the pond.

 3

I hear a (be) buzzing near the flower.

 4

The (spyder) is spinning a web.

 5

**YEAR 3B & 3/4W HOMEWORK LITERACY**  
**TERM 1 / Due Thursday**  
**Read, cover, write, check your spelling list words.**

Weekend				

Monday				

Tuesday				

Wednesday				

YEAR 3 & 3/4W HOMEWORK MATHS  
 TERM 1 /WEEK 10 - Due Thursday  
 Read, cover, write, check your spelling list words.



1)  $40 + 20 =$

Colour the correct bubble for your answer:

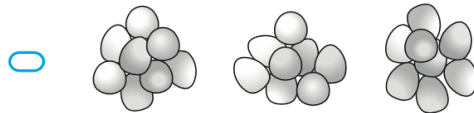
A farmer collects 24 eggs from his hen house.

To count the eggs he puts them into groups of 3.

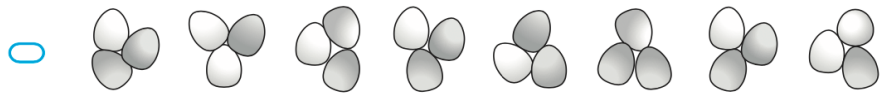
Which of the following shows the 24 eggs in groups of 3?

2)  $53 + 20 =$

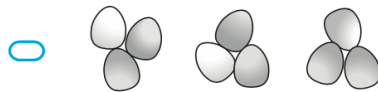
3)  $38 + 20 =$



4)  $54 + 20 =$



5)  $73 + 20 =$



6)  $19 + 20 =$

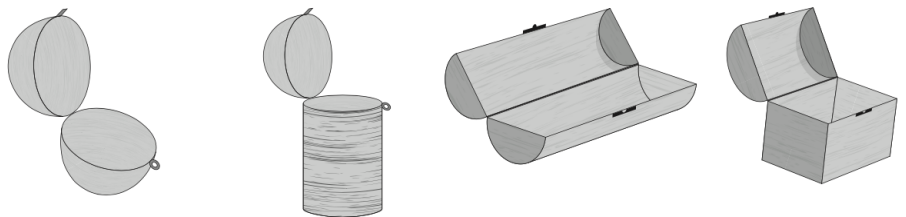


7)  $49 + 20 =$

8)  $38 + 20 =$

Which of these will look most like a cylinder when it is closed?


9)  $72 + 20 =$




10)  $29 + 20 =$



How many circles are there in this box? \_\_\_\_\_



How many apples are shown?



3



4



5



6



Write a number in the box to make this number sentence correct.

$6 + 4 =$