


Homework - Year 1 - Term 2

Week 6 Due Thursday 27th May 2021

<p>Number Bust</p> 	<p>Tally Marks:</p>	<p>Even or Odd</p>		
		<p>Number before:</p>	<p>Number after:</p>	<p>Subtract 3:</p>


Write these numbers in words.

9	
---	--


5	
---	--

7	
---	--


Draw the time.




4 o'clock



12 o'clock

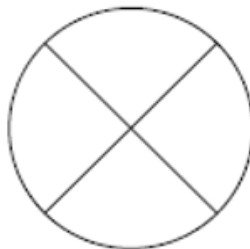
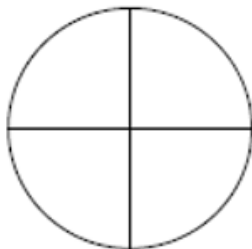


10 o'clock



6 o'clock

Which shape is split into half?



Write the missing number

32		34
----	--	----

16		18
----	--	----

27		29
----	--	----

9		11
---	--	----

What number is shown below?



--